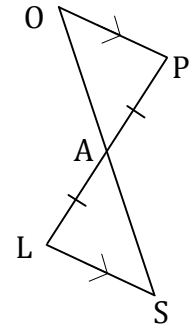
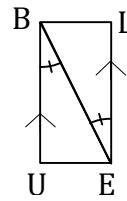
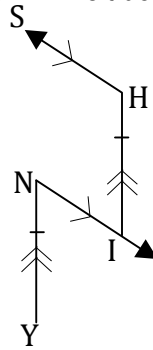
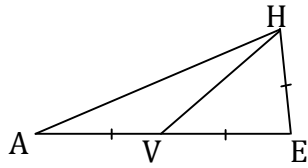
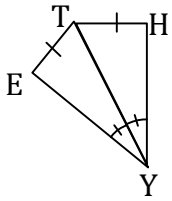


Geometry HW 12/4/12

Name _____ Date _____ Per _____

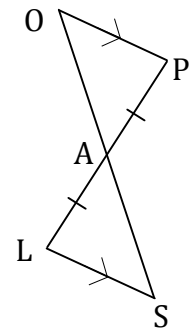
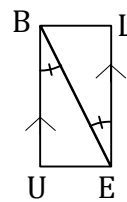
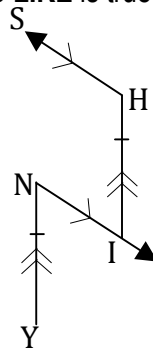
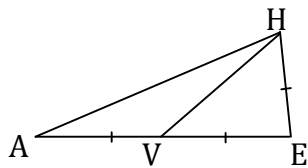
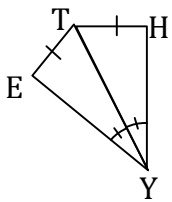
ON A FULL SHEET OF LINED PAPER Write what it **LOOKS LIKE** is true for each diagram and then what you **KNOW FOR SURE**.



Geometry HW 12/4/12

Name _____ Date _____ Per _____

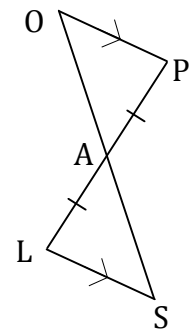
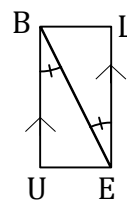
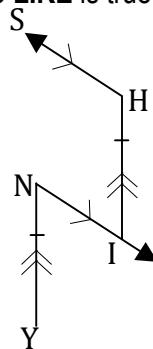
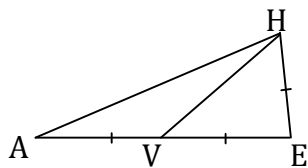
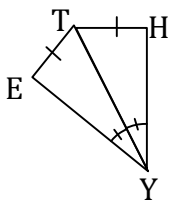
ON A FULL SHEET OF LINED PAPER Write what it **LOOKS LIKE** is true for each diagram and then what you **KNOW FOR SURE**.



Geometry HW 12/4/12

Name _____ Date _____ Per _____

ON A FULL SHEET OF LINED PAPER Write what it **LOOKS LIKE** is true for each diagram and then what you **KNOW FOR SURE**.



Geometry HW 12/4/12

Name _____ Date _____ Per _____

ON A FULL SHEET OF LINED PAPER Write what it **LOOKS LIKE** is true for each diagram and then what you **KNOW FOR SURE**.

